


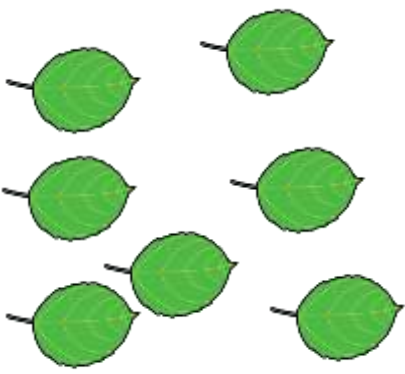


¿HAY UNA DECENA?. TACHA LO QUE NO SEA VERDAD




SÍ

NO



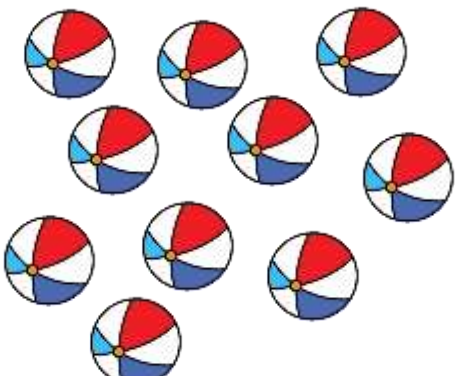
SÍ

NO



SÍ

NO


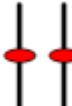
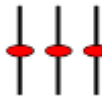

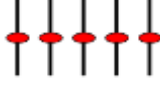


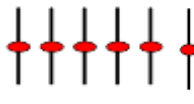
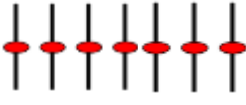

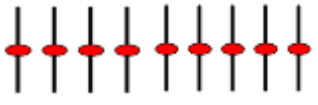
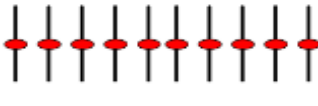
SÍ

NO






¿CUÁNTOS PALILLOS HAY? COMPLETA LA TABLA

	10
	
	
	
	



RODEA GRUPOS DE 10 :

HAY _____ DECENAS Y
_____ UNIDADESHAY _____ DECENAS Y
_____ UNIDADESHAY _____ DECENAS Y
_____ UNIDADESHAY _____ DECENAS Y
_____ UNIDADES

DIBUJA LOS PALILLOS QUE SE INDICAN:


12

16


13





CUENTA Y ESCRIBE EL NÚMERO:

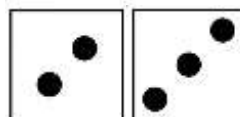



8





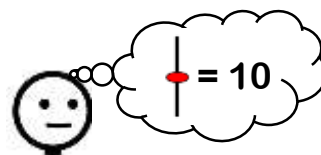








DIBUJA LOS PALILLOS QUE SE INDICAN:


 →

1	3
---	---

 →

1	4
---	---

 →

1	2
---	---

 →

1	0
---	---

 →

	5
--	---

 →

1	1
---	---

 →

	7
--	---

 →

	9
--	---

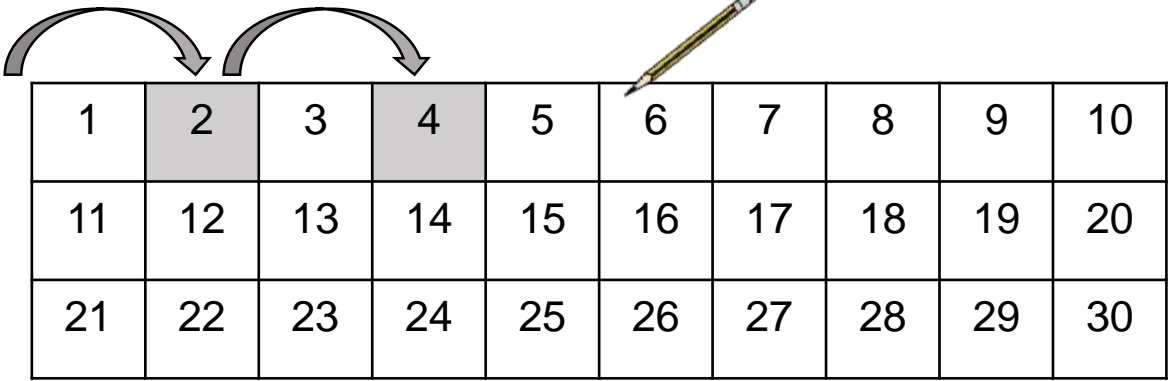


COMPLETA LA TABLA:

PALILLOS	NÚMERO	DECENA	UNIDAD



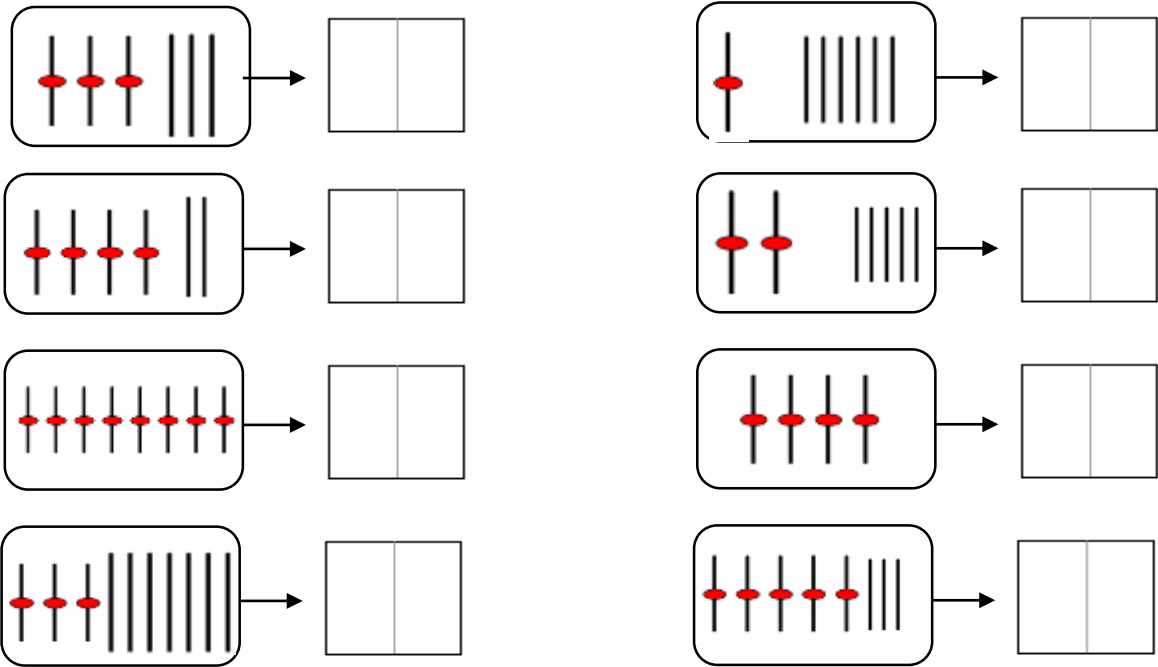
COLOREA LOS NÚMEROS DE 2 EN 2:



COMPLETA LA SERIE:

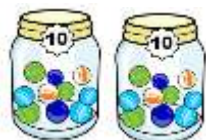


CUENTA LOS PALILLOS Y ESCRIBE EL NÚMERO:





UNE CON FLECHAS:



10



20




90



40



50



60



30




COMPLETA:

11	$10 + 1$
12	$10 + 2$
13	$10 + \underline{\quad}$
14	$10 + \underline{\quad}$
15	$10 + \underline{\quad}$
16	$10 + \underline{\quad}$

17	$10 + \underline{\quad}$
18	$10 + \underline{\quad}$
19	$10 + \underline{\quad}$
21	$20 + \underline{\quad}$
22	$20 + \underline{\quad}$
23	$20 + \underline{\quad}$




UNE CON FLECHAS:



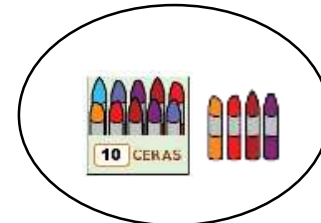
15




13




11




14



12



18



16




17



¿CUÁNTOS HAY?:















CONTINÚA LA SERIE ASCENDENTE:



1	2	3	4						
									30



ESCRIBE EL NÚMERO ANTERIOR Y POSTERIOR:

	6	
--	---	--

	8	
--	---	--

	9	
--	---	--

	11	
--	----	--

	14	
--	----	--

	17	
--	----	--

	19	
--	----	--



CONTINÚA LA SERIE DESCENDENTE:



30	29								
								2	1



SUMA Y ESCRIBE EL RESULTADO:



+



=

+

=



+



=

+

=



+



=

+

=



+



=

+

=



+



=

+

=



+



=

+

=



SUMA DECENAS Y ESCRIBE EL RESULTADO:



+



=

+

=



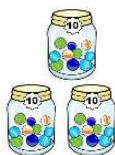
+



=

+

=



+



=

+

=



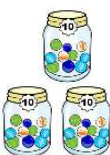
+



=

+

=



+



=

+

=



+



=

+

=



CONTINÚA LAS SERIES :



10

20

100



100

10