

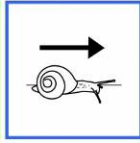





LEE

1



PRIMERO

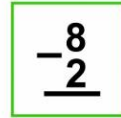
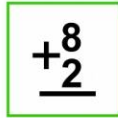

LEE

DESPACIO

EL

PROBLEMA

2



SEGUNDO

PIENSA

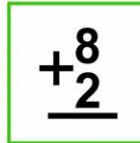
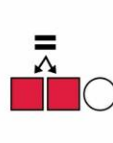
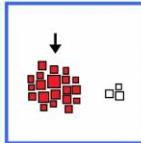
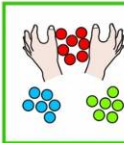
HAY

QUE

SUMAR

O

RESTAR



DAR


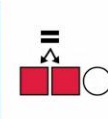
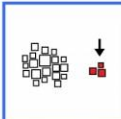

JUNTAR

LLEGAR

MÁS

IGUAL

SUMA



QUITAR

ROBAR

PERDER

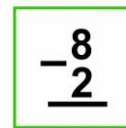

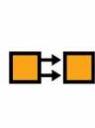
IRSE

MENOS

IGUAL

RESTA

3



TERCERO

COLOCA

LOS

NÚMEROS


PARA

SUMAR

O

RESTAR

4











CUARTO

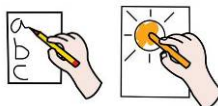
ESCRIBE

EL RESULTADO



LEE

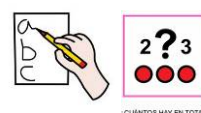
				3
EN	LA	JAULA	HAY	3
		2		
CANARIOS	Y	2	LOROS	¿CUÁNTOS HAY EN TOTAL?



ESCRIBE PINTA





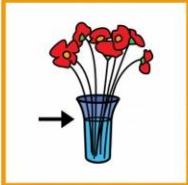





COLOCA SUMA RESTA

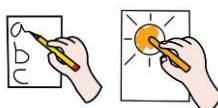


ESCRIBE EL RESULTADO

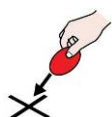


LEE

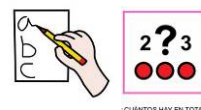
				5
EN	EL	FLORERO	HAY	
		4		
MARGARITAS	Y		ROSAS	¿CUÁNTAS HAY?



ESCRIBE PINTA



COLOCA SUMA RESTA



ESCRIBE EL RESULTADO

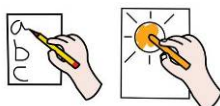
Autor pictogramas: Sergio Palao Origen: [ARASAAC \(http://www.arasaac.org\)](http://www.arasaac.org).Licencia: CC (BY-NC-SA)

Autora: Amaya Padilla Collado <http://www.garachicoenclave.blogspot.com>

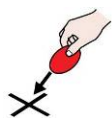


LEE

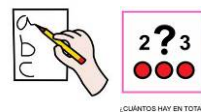
			5		
EL	NIÑO	TIENE	5	GLOBOS	CON
			3		
EL	VIENTO	PIERDE	3	CUÁNTOS LE QUEDAN	



ESCRIBE PINTA



COLOCA SUMA RESTA

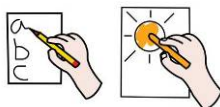


ESCRIBE EL RESULTADO

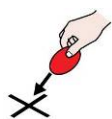


LEE

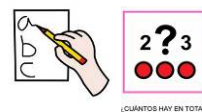
	6			
HAY	6	ÁRBOLES	EL	LEÑADOR
	4			
TALA	4	¿CUÁNTOS HAY?		



ESCRIBE PINTA



COLOCA SUMA RESTA









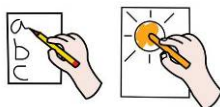
(¿CUÁNTOS HAY EN TOTAL?)

ESCRIBE EL RESULTADO

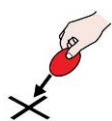


LEE

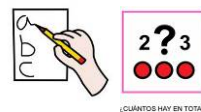
		8		
CAROL	TIENE	8	CARAMELOS	Y
	4		CUÁNTOS TIENEN EN TOTAL	
RENÉ	4			



ESCRIBE PINTA



COLOCA SUMA RESTA



ESCRIBE EL RESULTADO