


NOM: _____



1 2 3

ESCRIU EL NÚMERO:

QUATRE

TRETZE

DIVUIT

QUINZE

ONZE

SIS

SETZE


CATORZE

ZERO

DEU

DOTZE

DISSET



COMPLETA:

0

1

4

7

9

13

16





20

DATA: _____

NOM: _____



COMPTA:



SUMA:

$$\begin{array}{r} 7 \\ + 2 \\ \hline \end{array}$$


$$\begin{array}{r} 5 \\ + 6 \\ \hline \end{array}$$

$$\begin{array}{r} 8 \\ + 3 \\ \hline \end{array}$$

$$\begin{array}{r} 6 \\ + 4 \\ \hline \end{array}$$

DATA: _____

NOM: _____

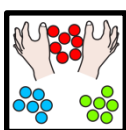




COMPLETA:

0			3					8	
	11							19	




FES GRUPS DE 3 UNITATS:



¿QUANTS GRUPS HI HA?

DATA: _____

NOM: _____



ESCRIU DEL 0 AL 20:

0									
---	--	--	--	--	--	--	--	--	--

									20
--	--	--	--	--	--	--	--	--	----



1 2 3

POSA ELS GOMETS QUE DIU A CADA ESPAI:

11

8

9



10

1

12

DATA: _____

NOM: _____



ESCRIU EL NÚMERO QUE VA DESPRÉS:

8 →

13 →

10 →

11 →

5 →

3 →

6 →

0 →

19 →

16 →

17 →

1 →



SUMA:

$$\begin{array}{r} 4 \\ + 5 \\ \hline \square \end{array}$$


$$\begin{array}{r} 7 \\ + 6 \\ \hline \square \end{array}$$

$$\begin{array}{r} 5 \\ + 2 \\ \hline \square \end{array}$$

$$\begin{array}{r} 6 \\ + 5 \\ \hline \square \end{array}$$

DATA: _____

NOM: _____



1 2 3

ESCRIU EL NÚMERO:

DOS

VINT

SET

NOU

DINOU

TRES

ONZE

QUINZE

UN

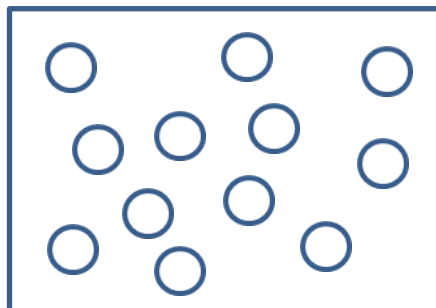
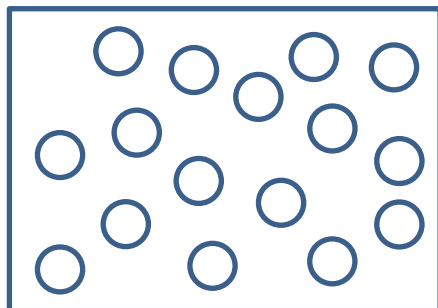
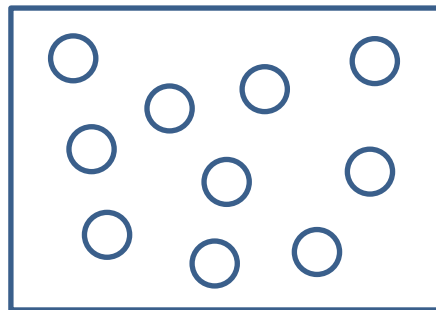
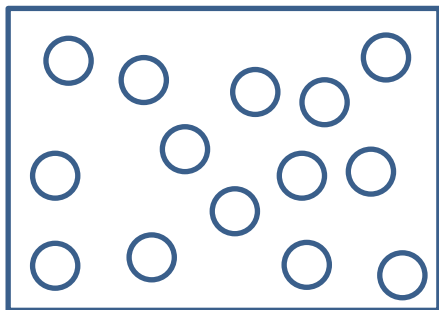
VUIT

TRETZE

SETZE



COMPTA:




DATA: _____


NOM: _____



FES GRUPS DE QUATRE:



¿QUANTS GRUPS HI HA?



ESCRIU EL NÚMERO QUE VA DESPRÉS:

7	→	<input type="text"/>
---	---	----------------------

14	→	<input type="text"/>
----	---	----------------------

10	→	<input type="text"/>
----	---	----------------------

18	→	<input type="text"/>
----	---	----------------------

4	→	<input type="text"/>
---	---	----------------------

2	→	<input type="text"/>
---	---	----------------------

9	→	<input type="text"/>
---	---	----------------------

0	→	<input type="text"/>
---	---	----------------------

19	→	<input type="text"/>
----	---	----------------------


16	→	<input type="text"/>
----	---	----------------------

15	→	<input type="text"/>
----	---	----------------------

1	→	<input type="text"/>
---	---	----------------------

DATA: _____

NOMBRE: _____



COMPLETA:

0						6	
				12			
	17			20			



1 2 3

POSA ELS GOMETS QUE DIU A CADA ESPAI:

	11		8
	9		10
	1		12

DATA: _____

NOM: _____

$$\begin{array}{r} +8 \\ \underline{+2} \end{array}$$

SUMA:

$$\begin{array}{r} 3 \\ +4 \\ \hline \square \end{array}$$

$$\begin{array}{r} 7 \\ +4 \\ \hline \square \end{array}$$

$$\begin{array}{r} 6 \\ +3 \\ \hline \square \end{array}$$

$$\begin{array}{r} 8 \\ +5 \\ \hline \square \end{array}$$

$$\begin{array}{r} 6 \\ +5 \\ \hline \square \end{array}$$

$$\begin{array}{r} 7 \\ +3 \\ \hline \square \end{array}$$

$$\begin{array}{r} 2 \\ +5 \\ \hline \square \end{array}$$

$$\begin{array}{r} 9 \\ +6 \\ \hline \square \end{array}$$