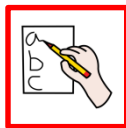


NOME: \_\_\_\_\_



1 2 3

SCRIVI IL NUMERO:

QUATTRO

TREDICI

DICIOTTO

QUINDICI

UNDICI

SEI

SEDICI


QUATTORDICI

ZERO

DIECI

DODICI

DICIASSETTE



COMPLETA:

0

1

4

7

9


13

16





20

DATA: \_\_\_\_\_

NOME: \_\_\_\_\_



CONTO:



SOMMA:

$$\begin{array}{r} 7 \\ + 2 \\ \hline \end{array}$$


$$\begin{array}{r} 5 \\ + 6 \\ \hline \end{array}$$

$$\begin{array}{r} 8 \\ + 3 \\ \hline \end{array}$$

$$\begin{array}{r} 6 \\ + 4 \\ \hline \end{array}$$

DATA: \_\_\_\_\_

NOME: \_\_\_\_\_



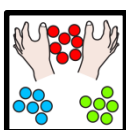


COMPLETA:

0			3					8	
---	--	--	---	--	--	--	--	---	--

	11							19	
--	----	--	--	--	--	--	--	----	--



CERCHIA A GRUPPI DI 3:

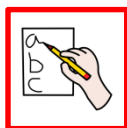


QUANTI GRUPPI CI SONO?

--

DATA: \_\_\_\_\_

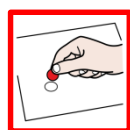
NOME: \_\_\_\_\_



SCRIVI DALLO 0 AL 20:

0									
---	--	--	--	--	--	--	--	--	--

									20
--	--	--	--	--	--	--	--	--	----



**1 2 3**

INCOLLA IL NUMERO DI ADESIVI INDICATO:

11

8

9



10

1

12

DATA: \_\_\_\_\_

NOME: \_\_\_\_\_



SCRIVI IL NUMERO CHE VIENE DOPO:

8 →

13 →

10 →

11 →

5 →

3 →

6 →

0 →

19 →

16 →

17 →

1 →


$$\begin{array}{r} 8 \\ +2 \\ \hline \end{array}$$

SOMMA:

$\begin{array}{r} 4 \\ +5 \\ \hline \end{array}$	$\begin{array}{r} 7 \\ +6 \\ \hline \end{array}$	$\begin{array}{r} 5 \\ +2 \\ \hline \end{array}$	$\begin{array}{r} 6 \\ +5 \\ \hline \end{array}$
<input type="text"/>	<input type="text"/>	<input type="text"/>	<input type="text"/>

DATA: \_\_\_\_\_

NOME: \_\_\_\_\_



**1 2 3**

SCRIVI IL NUMERO:

DUE

VENTI

SETTE

NOVE

DICIANNOVE

TRE

UNDICI

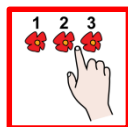
QUINDICI

UNO

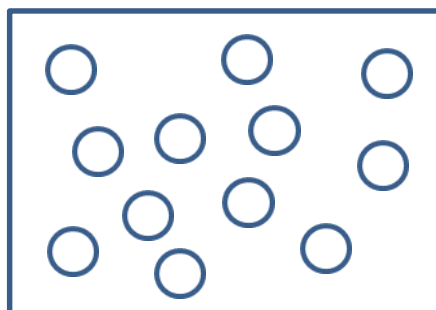
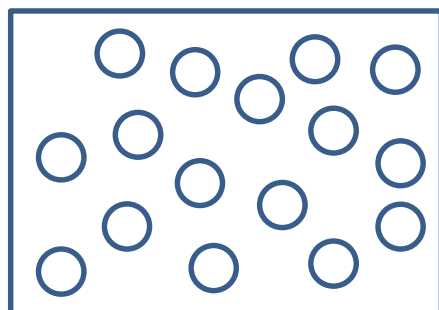
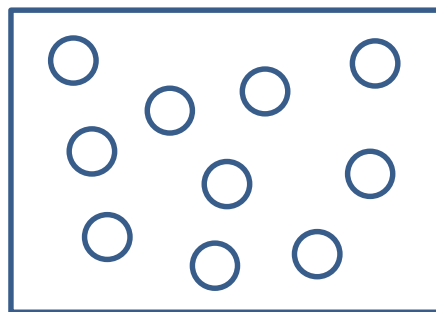
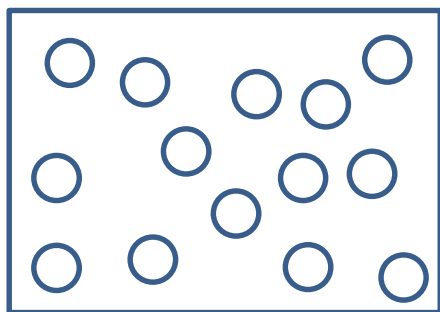
OTTO

TREDICI

SEDICI



CONTA:

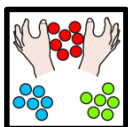




DATA: \_\_\_\_\_

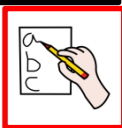
NOME: \_\_\_\_\_



CERCHIA A GRUPPI DI 4:



QUANTI GRUPPI CI SONO?



SCRIVI IL NUMERO CHE VIENE DOPO:

7 →

14 →

10 →

18 →

4 →

2 →

9 →

0 →

19 →


16 →

15 →

1 →

DATA: \_\_\_\_\_

NOME: \_\_\_\_\_



COMPLETA:

0						6	
				12			
	17			20			



1 2 3

INCOLLA IL NUMERO DI ADESIVI INDICATO:

	11		8
	9		10
	1		12

DATA: \_\_\_\_\_

NOMBRE: \_\_\_\_\_

$$\begin{array}{r} +8 \\ \underline{+2} \end{array}$$

SOMMA:

$\begin{array}{r} +3 \\ +4 \\ \hline \square \end{array}$	$\begin{array}{r} +7 \\ +4 \\ \hline \square \end{array}$	$\begin{array}{r} +6 \\ +3 \\ \hline \square \end{array}$	$\begin{array}{r} +8 \\ +5 \\ \hline \square \end{array}$
$\begin{array}{r} +6 \\ +5 \\ \hline \square \end{array}$	$\begin{array}{r} +7 \\ +3 \\ \hline \square \end{array}$	$\begin{array}{r} +2 \\ +5 \\ \hline \square \end{array}$	$\begin{array}{r} +9 \\ +6 \\ \hline \square \end{array}$