


NOME: _____



1 2 3

ESCREVE O NÚMERO:

QUATRO

TREZE

DEZOITO

QUINZE

ONZE

SEIS

DEZASSEIS

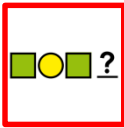
CATORZE

ZERO

DEZ

DOZE

DEZASSETTE



COMPLETA:

0

1

4

7

9

13

16





20

DATA: _____

NOME: _____



CONTA:



SOMA:

$$\begin{array}{r} 7 \\ + 2 \\ \hline \end{array}$$


$$\begin{array}{r} 5 \\ + 6 \\ \hline \end{array}$$

$$\begin{array}{r} 8 \\ + 3 \\ \hline \end{array}$$

$$\begin{array}{r} 6 \\ + 4 \\ \hline \end{array}$$

DATA: _____

NOME: _____

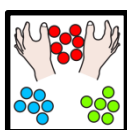




COMPLETA:

0			3					8	
	11							19	



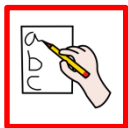
RODEIA DE 3 EM 3:



QUANTOS CONJUNTOS FORMASTE?

DATA: _____

NOME: _____



COMPLETA DE 0 A 20:

0									
---	--	--	--	--	--	--	--	--	--

									20
--	--	--	--	--	--	--	--	--	----



1 2 3

COLA O NÚMERO DE FICHAS QUE SE INDICA:

	11
--	----

	8
--	---

	9
--	---



	10
--	----

	1
--	---

	12
--	----

DATA: _____

NOME: _____



ESCREVE O NÚMERO QUE VEM DEPOIS:

8 →

13 →

10 →

11 →

5 →

3 →

6 →

0 →

19 →

16 →

17 →

1 →

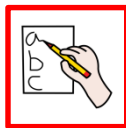
$$\begin{array}{r} +8 \\ \underline{+2} \end{array}$$

SOMA:

$\begin{array}{r} 4 \\ + \\ 5 \\ \hline \square \end{array}$	$\begin{array}{r} 7 \\ + \\ 6 \\ \hline \square \end{array}$	$\begin{array}{r} 5 \\ + \\ 2 \\ \hline \square \end{array}$	$\begin{array}{r} 6 \\ + \\ 5 \\ \hline \square \end{array}$
--	--	--	--

DATA: _____

NOME: _____



1 2 3

ESCREVE O NÚMERO:

DOIS

VINTE

SETE

NOVE

DEZANOVE

TRÊS

ONZE

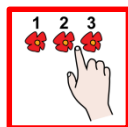
QUINZE

UM

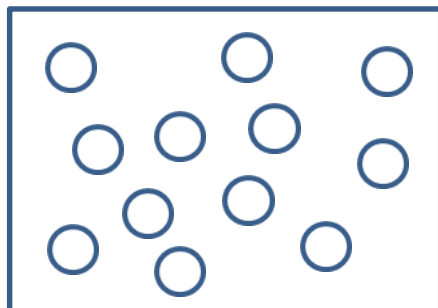
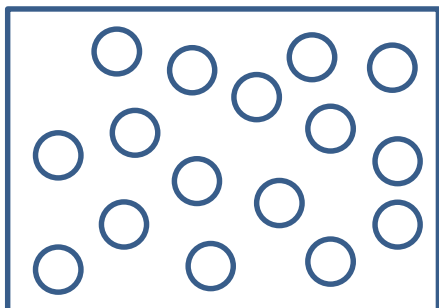
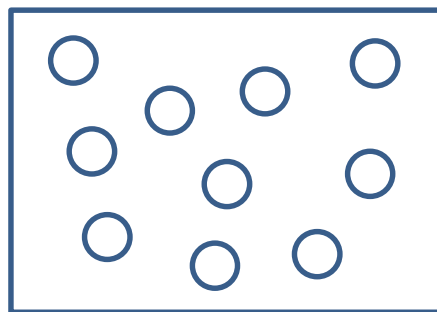
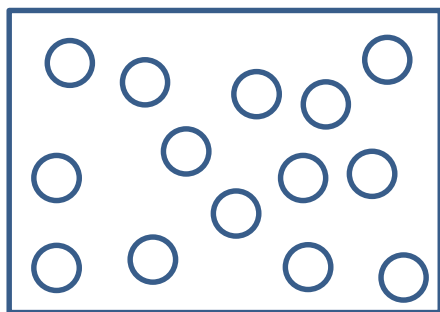
OITO

TREZE

DEZASSEIS



CONTA:

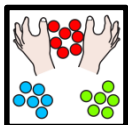



DATA: _____


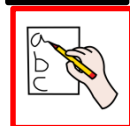
NOME: _____



RODEIA DE 4 EM 4:



QUANTOS CONJUNTOS FORMASTE?



ESCREVE O NÚMERO QUE VEM DEPOIS :

7 →

14 →

10 →

18 →

4 →

2 →

9 →

0 →

19 →


16 →

15 →

1 →

DATA: _____

NOME: _____



COMPLETA:

0						6	
				12			
	17			20			



1 2 3

COLA O NÚMERO DE FICHAS QUE SE INDICA :

	11		8
	9		10
	1		12

DATA: _____

NOME: _____

$$\begin{array}{r} 8 \\ + 2 \\ \hline \end{array}$$

SOMA: _____

$\begin{array}{r} 3 \\ + 4 \\ \hline \square \end{array}$	$\begin{array}{r} 7 \\ + 4 \\ \hline \square \end{array}$	$\begin{array}{r} 6 \\ + 3 \\ \hline \square \end{array}$	$\begin{array}{r} 8 \\ + 5 \\ \hline \square \end{array}$
$\begin{array}{r} 6 \\ + 5 \\ \hline \square \end{array}$	$\begin{array}{r} 7 \\ + 3 \\ \hline \square \end{array}$	$\begin{array}{r} 2 \\ + 5 \\ \hline \square \end{array}$	$\begin{array}{r} 9 \\ + 6 \\ \hline \square \end{array}$

DATA: _____