

# MI BASTANO?




POSSIEDO € 9

L'orsetto costa? \_\_\_\_\_

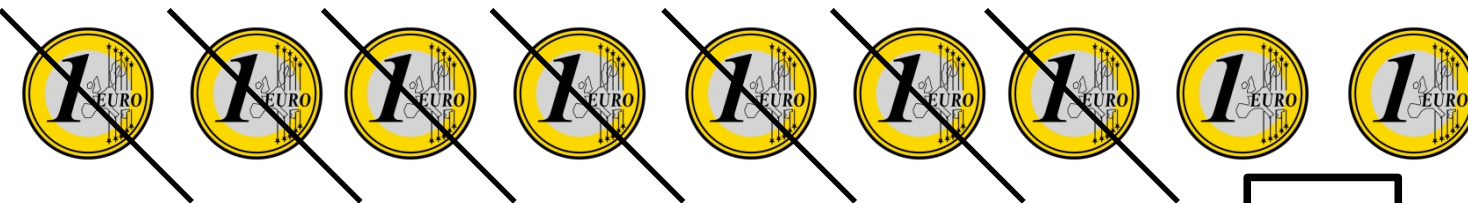
Posso comprarlo? \_\_\_\_\_

Mi avanzano dei soldi

Quanti euro avanzo \_\_\_\_\_



7 €

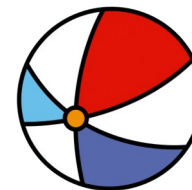


$$\square - \square = \square$$



POSSIEDO 11 €

VORREI COMPRARE



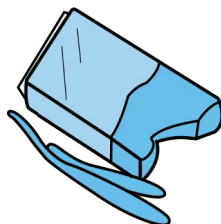
8 €

MI BASTANO I SOLDI?

$$\square - \square = \square$$

MI AVANZANO \_\_\_\_\_ euro

VORREI COMPRARE



5 €

MI BASTANO I SOLDI?

$$\square - \square = \square$$

MI AVANZANO \_\_\_\_\_ euro

VORREI COMPRARE



6 €

MI BASTANO I SOLDI?

$$\square - \square = \square$$

MI AVANZANO \_\_\_\_\_ euro



MI BASTANO/ MI SERVONO ANCORA?



POSSIEDO

9 €

LA BAMBOLA COSTA? \_\_\_\_\_

POSSO COMPRARLA? \_\_\_\_\_



14 €

QUANTI SOLDI MI MANCANO? \_\_\_\_\_



$$\square - \square = \square$$



## POSSIEDO

11 €

VORREI COMPRARE

## MI BASTANO I SOLDI?




$$\square - \square = \square$$

MI MANCANO euro

VORREI COMPRARE

## MI BASTANO I SOLDI?

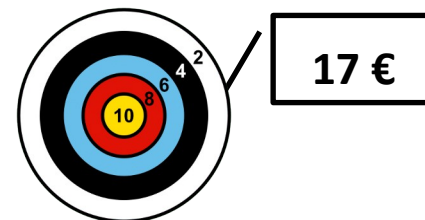


$$\square - \square = \square$$

MI MANCANO euro\_

VORREI COMPRARE

## MI BASTANO I SOLDI?



$$\square - \square = \square$$

MI MANCANO \_\_\_\_\_ euro



10	11	12	13	14	15	16	17	18
----	----	----	----	----	----	----	----	----